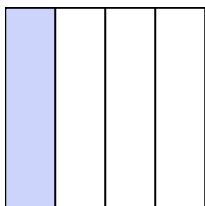


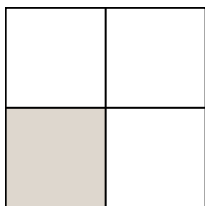


Write the shaded amount in word form.

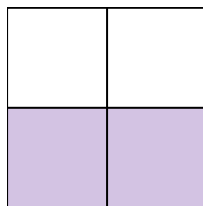
Ex)



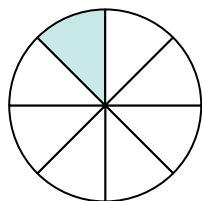
1)



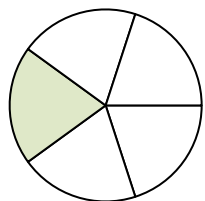
2)



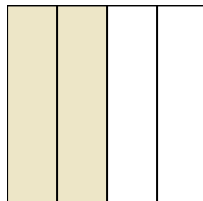
3)




4)




5)



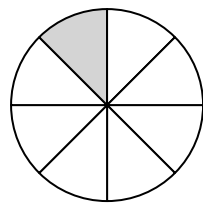
6)




7)



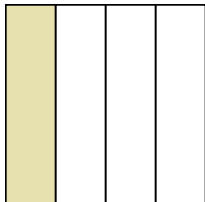
8)



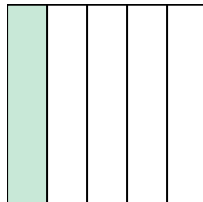
9)




10)




11)



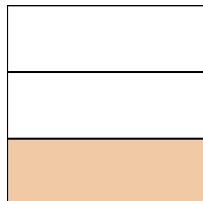
12)



13)



14)



## Answers

Ex. one-fourth

1. \_\_\_\_\_

2. \_\_\_\_\_

3. \_\_\_\_\_

4. \_\_\_\_\_

5. \_\_\_\_\_

6. \_\_\_\_\_

7. \_\_\_\_\_

8. \_\_\_\_\_

9. \_\_\_\_\_

10. \_\_\_\_\_

11. \_\_\_\_\_

12. \_\_\_\_\_

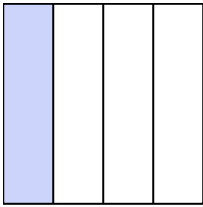
13. \_\_\_\_\_

14. \_\_\_\_\_

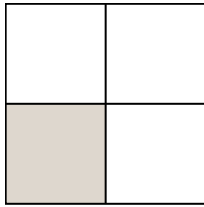


Write the shaded amount in word form.

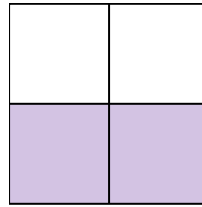
Ex)



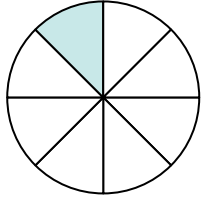
1)



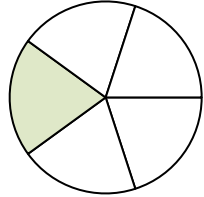
2)




3)




4)



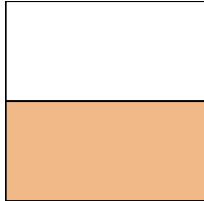
5)



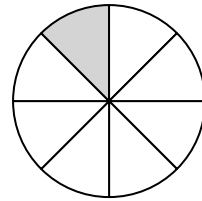
6)




7)



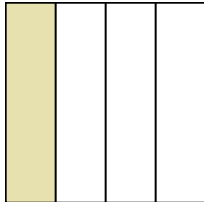
8)



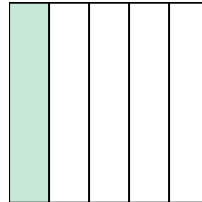
9)




10)




11)



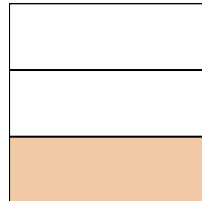
12)



13)



14)

**Answers**

Ex.

**one-fourth**

1.

**one-third**

2.

**two-thirds**

3.

**one-eighth**

4.

**one-fifth**

5.

**two-fourths**

6.

**one-half**

7.

**one-half**

8.

**one-eighth**

9.

**three-eighths**

10.

**one-fourth**

11.

**one-fifth**

12.

**one-fifth**

13.

**one-half**

14.

**one-third**